

Now draw a plan from the model you have just completed. Use one cm graph paper, with each grid representing one meter.



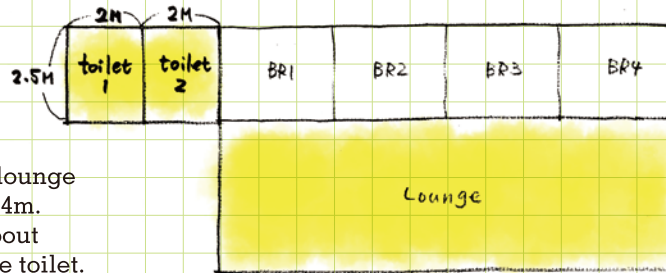
7

Draw the 40feet container, about 12m x 2.5m. The container could be divided into 4 rooms, about 3m x 2.5m.



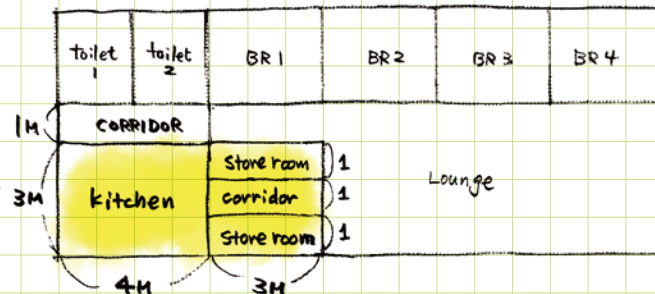
8

The width of the lounge should be about 4m. The two toilet, about 2 m x 2.5 m for one toilet.



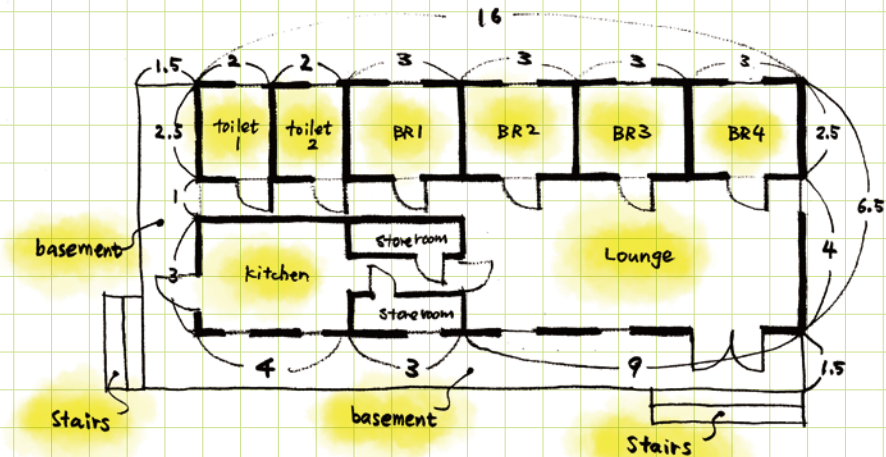
9

The kitchen, about 4m x 3m.



10

Use a bold line for the walls and a fine line for the windows and doorways. Also indicate symbols for doorways and the names of the various rooms.



11

Once you have finished drawing the plan, also draw the elevation.

